

*Ixtisoslashgan maktablarga kiruvchi o‘quvchilar uchun*

## TEST SAVOLLAR KITOBI

**DIQQAT!**

Test topshiriqlarini yechishdan avval savollar kitobini, varaqlab unda matematikadan 25 ta va ingliz tilidan 15 ta savol mavjudligini tekshiring. Agar savollar soni kamligi aniqlansa darhol kuzatuvchiga ma’lum qiling.

FANLAR:

Blok1: Matematika

Blok2: Ingliz tili

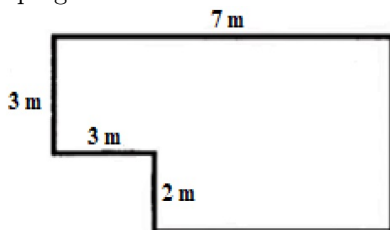
**Toshkent 2022-y**

1. Musiqa to'garagi uchun 22 ta rubob, undan 6 ta kam dutor va doira olib kelindi. Hammasi bo'lib 47 ta musiqa asboblari olib kelingan bo'lsa, nechta doira olib kelingan?
- (a) 11  
(b) 10  
(c) 8  
(d) 9
6. 9, 6, 2 raqamlari berilgan. Bu raqamlardan foydalanib nechta uch xonali son hosil qilish mumkin?
- (a) 54  
(b) 48  
(c) 27  
(d) 36

2. Hisoblang:

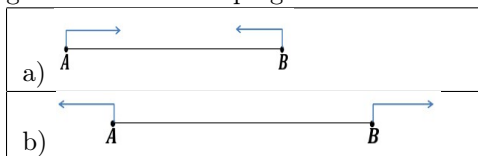
$$7464 \cdot 86 - (88088 : 44 + 97 \cdot 98) - (4809 \cdot 49 - 234643) + 87175$$

- (a) 716673  
(b) 715573  
(c) 716553  
(d) 716573
7.  $3 \text{ dm}^2 15 \text{ cm}^2$  necha  $\text{cm}^2$  bo'ladi?
- (a) 315  
(b) 3015  
(c) 31,5  
(d) 30015
3. Berilgan rasmdagi shakl yuzi va perimetrini toping:



- (a)  $S = 44 \text{ m}^2$ ;  $P = 22 \text{ m}$   
(b)  $S = 29 \text{ m}^2$ ;  $P = 24 \text{ m}$   
(c)  $S = 37 \text{ m}^2$ ;  $P = 28 \text{ m}$   
(d)  $S = 27 \text{ m}^2$ ;  $P = 22 \text{ m}$
4. Dangasa bola bir sutkaning yarmini uxlash va ovqatlanish, choragini maktabda bo'lishga, yana bir choragini o'yin va televizor ko'rishga sarfladi. Sutkaning qolgan qismida dars tayyorladi. U necha soat dars tayyorlagan?
- (a) dars tayyorlamagan  
(b) 0,5  
(c) 2  
(d) 1
5. Yuzi  $630 \text{ cm}^2$  bo'lgan to'g'ri to'rtburchakning eni 15 cm. Bu to'g'ri to'rtburchakning perimetrini toping.
- (a) 94 cm  
(b) 104 cm  
(c) 124 cm  
(d) 114 cm
8. 6 ta kitob va 7 ta daftar 86000 so'm, 2 ta kitob va 5 ta daftar 50000 so'm bo'lsa, 1 ta kitob va 1 ta daftar narxi jami necha so'm?
- (a) 15000 so'm  
(b) 8000 so'm  
(c) 13000 so'm  
(d) 5000 so'm
9. Barcha ikki xonali toq natural sonlar o'rta arifmetigini toping.
- (a) 51  
(b) 55  
(c) 49  
(d) 53
10. Koordinata nurida AB kesma uzunligi 16 birlikka teng. Uning o'rtasi D(19) nuqtada va A nuqta chapda bo'lsa, A va B nuqtalar koordinatalarini aniqlang.
- (a) A(11); B(27)  
(b) A(10); B(26)  
(c) A(12); B(28)  
(d) A(9); B(25)

11.  $A$  va  $B$  shaharlar orasidagi masofa 420 km.  $A$  shaharda turgan avtomobil tezligi 55 km/h,  $B$  shaharda turgan avtomobil tezligi esa 75 km/h. 2 soatdan so'ng ular orasidagi masofani quyidagi ikki xol uchun toping.



- (a) 160 km; 680 km  
 (b) 160 km; 640 km  
 (c) 180 km; 660 km  
 (d) 160 km; 660 km
12. Tenglamani yeching:  
 $(14 - 56 : (3 + x)) \cdot 7 = 42$
- (a) 5  
 (b) 4  
 (c) 6  
 (d) 1
13. Quyidagi tengsizlikni qanoatlantiruvchi natural sonlarni toping:  $24 : x > 6$
- (a) 6; 8; 12; 24  
 (b) 0; 1; 2; 3  
 (c) 1; 2; 3  
 (d) 1; 2; 3; 4
14. Kartoshka narxi piyoz narxidan 2400 so'm qimmat turadi. Agar 2 kg piyoz va 5 kg kartoshka uchun 23200 so'm to'langan bo'lsa, kartoshka narxini aniqlang.
- (a) 5000 so'm  
 (b) 4000 so'm  
 (c) 4500 so'm  
 (d) 4200 so'm
15. Maktabning faollar zalida jami 69 ta o'quvchi bo'lib ularning 20 tasi 5-sinfda, 24 tasi 6-sinfda qolganlari esa 7-sinfda o'qiydi. Ixtiyoriy tanlab olingan bitta o'quvchini 7-sinfda o'qishini bildiruvchi kasrni aniqlang.
- (a)  $\frac{35}{69}$   
 (b)  $\frac{25}{44}$   
 (c)  $\frac{44}{69}$   
 (d)  $\frac{25}{69}$

16. Kutubxonada badiiy kitoblar 449 ta, darslik kitoblari esa badiiy kitoblardan 111 ta ko'p, xoriy tildagi kitoblar esa badiiy kitoblardan 76 ta kam. Kutubxonada shu uch turdagi kitoblardan jami nechta bor?

- (a) 1483  
 (b) 1428  
 (c) 1482  
 (d) 1493

17. Tenglamani yeching:

$$653,42 + 370 = 43,523x + 87,42 + 34,477x$$

- (a) 11  
 (b) 12,2  
 (c) 12  
 (d) 11,1

18. Bir vaqtning o'zida Asror 10 dan boshlab har bir keyingi sonlarni avvalgisidan 4 ga orttirib aytapti (10, 14, 18, ...), Mubina esa 120 dan boshlab keyingi har bir sonni avvalgisidan 6 ga kamaytirib aytapti (120, 114, 108, ...). Quyidagi mulohazalarning to'g'ri yoki noto'g'ri ekanligini aniqlang:

Mulohazalar	to'g'ri	noto'g'ri
I. Ikkalasi o'n ikkinchi aytgan sonlari bir xil.	A	B
II. Mubina "60" deganda, Asror aytgan son oltiga bo'linadi.	A	B
III. Asror "22" deganda, Mubina "102" ni aytadi.	A	B
IV. Asrorning 6-aytgan soni Mubining 11-aytgan sonining yarmiga teng.	A	B

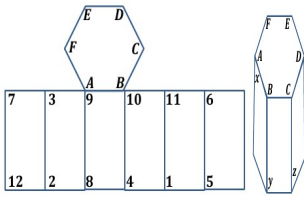
- (a) I-A; II-A; III-A; IV-A  
 (b) I-A; II-B; III-A; IV-A  
 (c) I-B; II-B; III-A; IV-A  
 (d) I-A; II-B; III-A; IV-B

19. Hisoblang:

$$6 \text{ t } 3 \text{ sr } 15 \text{ kg} - 4 \text{ t } 9 \text{ sr } 56 \text{ kg}$$

- (a) 2 t 5 sr 69 kg  
 (b) 1 t 5 sr 56 kg  
 (c) 1 t 3 sr 59 kg  
 (d) 3 sr 59 kg

20. Chizmadan foydalanib,  $(x-y) \cdot z$  ning qiymatini toping: 23. .



- (a) 5
- (b) 4
- (c) 12
- (d) 14

21. .

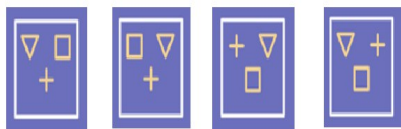
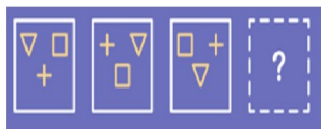
I.  $\blacktriangle 25 (57) 49$

II.  $\blacktriangle 16 (48) 64$

III.  $\blacktriangle 81 ( ? ) 36$

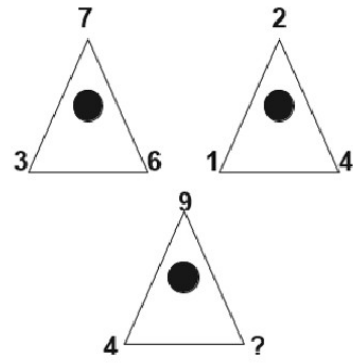
- (a) 90
- (b) 96
- (c) 108
- (d) 84

22. .



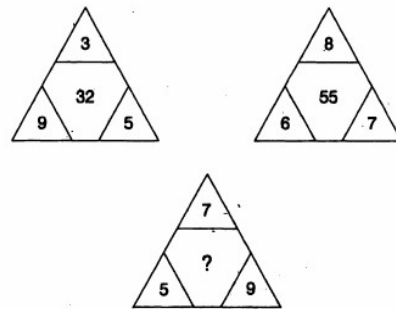
- 1
- 2
- 3
- 4

- (a) 2
- (b) 3
- (c) 4
- (d) 1



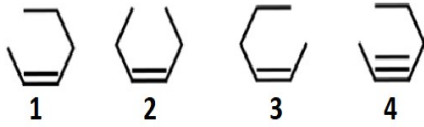
- (a) 14
- (b) 10
- (c) 9
- (d) 18

24. .



- (a) 40
- (b) 44
- (c) 48
- (d) 42

25. .



- (a) 1
- (b) 3
- (c) 2
- (d) 4

26. Read the text and answer the questions.

I'm almost 19 years old, and I finished my first year of university. I'm currently on holiday, and I have a lot of free time. Having free time is nice, but the problem is that when you are a student, you never have money. And when you have a lot of free time, but you don't have much money, it can get boring.

Every morning I go to the gym, and I read in the afternoons. But I still have a lot of free time. Going to the gym takes me about two hours, including the road time and the post-gym shower. And I usually read for one hour. Another activity that I do is watching documentaries. I study history, and I love historical documentaries. I learn a lot from them. I watch documentaries for one and a half hours four or five times a week. I have online friends and we chat a lot about history.

But those activities are a small part of my day. When I'm not at the gym or reading, I get bored, and I often play video games for hours. I enjoy playing video games, but I don't think it's a productive activity. When I play for a long time, I feel bad. I'd like to find more productive activities to do, but it isn't easy. I live in a small town, and there aren't many things to do. Do you have any suggestions? What do you do with your free time?

Choose the right synonym to "enjoy".

- (a) like
- (b) excited
- (c) dislike
- (d) hate

27. Choose the right antonym to "first".

- (a) early
- (b) last
- (c) head
- (d) second

28. Choose the odd word.

- (a) class
- (b) timetable
- (c) break time
- (d) street

29. Choose the right meaning to the word in CAPITAL letters.  
"I'm ALMOST 19 years old, and I finished my first year of university."  
(a) nearly  
(b) yet  
(c) already  
(d) just
30. Choose the right meaning to the word in CAPITAL letters.  
"I'm ALMOST 19 years old, and I finished my first year of university."  
(a) already  
(b) nearly  
(c) yet  
(d) just
31. Choose the right meaning to the word in CAPITAL letters.  
"I'm ALMOST 19 years old, and I finished my first year of university."  
(a) already  
(b) yet  
(c) nearly  
(d) just
32. Choose the comparative degree of "productive".  
(a) the most productive  
(b) more productive  
(c) productive  
(d) the productive
33. Find the right Past Simple of this sentence given below.  
"I have online friends and we chat a lot about history."  
(a) I had online friends and we chatted a lot about history.  
(b) I was having online friends and we chatted a lot about history.  
(c) I had online friends and we were chatting a lot about history.  
(d) I had online friends and we chat a lot about history.
34. Find the right Past Simple of this sentence given below.  
"I have online friends and we chat a lot about history."  
(a) I had online friends and we were chatting a lot about history.  
(b) I was having online friends and we chatted a lot about history.  
(c) I had online friends and we chat a lot about history.  
(d) I had online friends and we chatted a lot about history.
35. Put the words in the right order.  
"wants /to get /He/ time. / spending / free/advice / about/ some/ his"  
(a) He wants to get advice about spending free his some time.  
(b) He wants to get some advice about spending his free time.  
(c) He wants to get some free time advice spending about his.  
(d) He wants some advice about to get spending his free time.
36. Find the regular verb.  
(a) read  
(b) finish  
(c) go  
(d) take
37. Find the FALSE sentence from the text.  
(a) He has a lot of free time.  
(b) He has never got bored.  
(c) Watching documentaries is one of his activities.  
(d) He goes to gym every morning.
38. Find the correct answer from the text to definition given below.  
Something that is done for enjoyment, especially an organized event .  
(a) town  
(b) free time  
(c) activity  
(d) post-gym

39. Find the right answer to the question from the text.

"How many time does he watch documentaries in a week?"

- (a) for one and a half hours
- (b) four or five times
- (c) every morning
- (d) only once

40. Find the right answer to the question from the text.

What can people do on the Internet?

- (a) buying or selling clothes
- (b) all answers are correct
- (c) writing a blog
- (d) watching TV programme